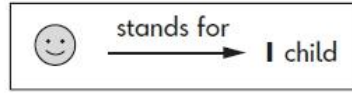










Some children made a chart.

The fruit we like best



 apple	
 orange	
 banana	
 pear	

How many **more** children chose pears than apples?

children

What else can you tell me about the data?