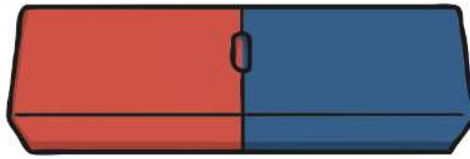


Monday 22nd February 2021

Exploring Magnets

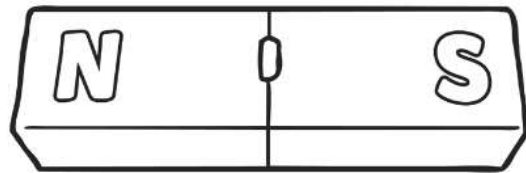
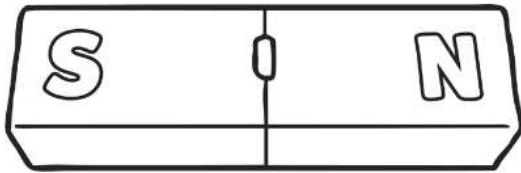
Here is a magnet:

Label the magnet.



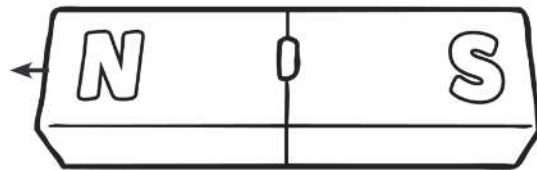
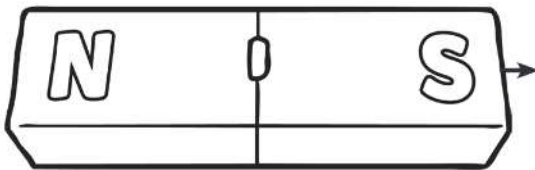
Predict what you think will happen if you put ends of the same colour together.

Draw arrows to show what force happens in this picture.



Now predict what will happen if you put a red and a blue end together.

Draw arrows to show what force happens in this picture.



If you can- now test your prediction. Explain what you observed happening.

Magnetism

m a g n e t i s m j k p
m n o p q r s t u v w l
y o a b c d m f g h p a
k r m n o p e r l t u s
a t t r a c t d a f s t
i h k l m n a p s r h i
u v w d y z l b s c e c
g h o j k l m n o p q r
s o u v w x y z i r o n
w f g h i j k s t i c k
q r s t u s o u t h a b
r e p e l h i j k l m n

magnetism

north

attract

repel

metal

stick

plastic

wood

iron

south

push

glass