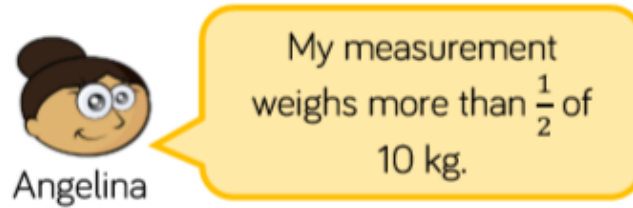
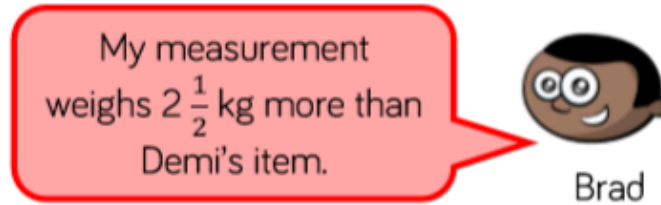


Use the clues to work out who has which measurement.



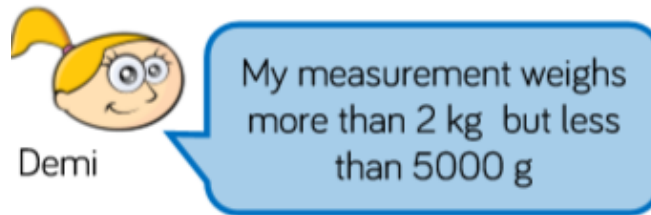
Angelina

My measurement weighs more than $\frac{1}{2}$ of 10 kg.



Brad

My measurement weighs $2\frac{1}{2}$ kg more than Demi's item.



Demi

My measurement weighs more than 2 kg but less than 5000 g

5 kg and 600 g

5 kg

2 kg and 500 g

Working Out