

Monday

1.3.21

TBAT convert between units of time

How long does it take to:

walk one mile?

fly to Mars?

make a cup of tea?

drive from Lands End to John O'Groats?



1.3.21

TBAT convert between units of time

Complete these facts:

There are ____ seconds in a minute.

There are ____ minutes in an hour.

There are ____ hours in a day.

There are ____ days in a week.

There are ____ weeks in a year.

There are ____ years in a decade.

There are ____ years in a century.

There are ____ years in a millennium.

1.3.21

TBAT convert between units of time

So...

How many seconds are in 10 minutes?

5 minutes?

3 and a half minutes?

1.3.21

TBAT convert between units of time

How many hours are in 10 days?

5 days?

13 and a half days?

1.3.21

TBAT convert between units of time

Choose Bronze, Silver or Gold task to complete.

Extension:

Can you work out how many days you have been alive for? How about hours?

Tuesday

2.3.21

TBAT read the time on a 12- and 24-hour clock

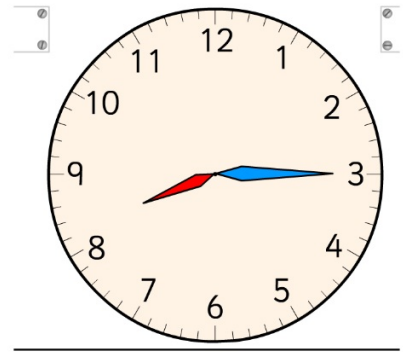
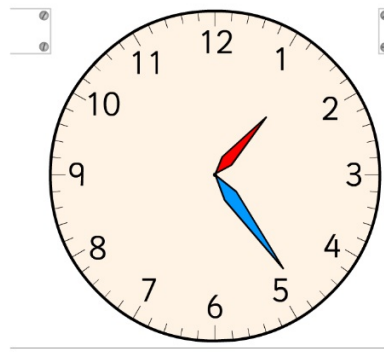

What is the difference between these two clocks?



2.3.21

TBAT read the time on a 12- and 24-hour clock

What would you be doing at these times?



AM or PM?

Write them as digital PM times on a 24-hour clock.

2.3.21

TBAT read the time on a 12- and 24-hour clock

What time is being shown here?

Wednesday

3.3.21

TBAT read and interpret timetables

The image displays a collage of various timetables, illustrating the concept of scheduling. The leftmost section shows a bus schedule with destinations like Busan, Seoul, San Francisco, and Hong Kong, listing bus numbers and departure times. The middle section features a program schedule for 'NatureWatch', 'QuizTime', and 'Cookery Channel' with specific time slots and program titles. The rightmost section is a large, tilted, and partially obscured timetable with many numbers, possibly representing a train or flight schedule.

3.3.21

TBAT read and interpret timetables

Waterloo (London)	07:10	08:35	11:35	13:50
Woking	07:35	—	12:00	14:15
Basingstoke	07:55	09:21	12:21	—
Andover	08:16	—	12:42	—
Salisbury	08:36	09:54	13:17	15:08
Yeovil	09:24	10:42	14:07	15:48
Honiton	10:01	—	14:53	16:34
Exeter	10:27	11:42	15:18	16:59



What time does the second train leave Waterloo?


When does the last train arrive in Exeter?

What time does the 08:35 train arrive in Salisbury?

3.3.21

TBAT read and interpret timetables

Waterloo (London)	07:10	08:35	11:35	13:50
Woking	07:35	—	12:00	14:15
Basingstoke	07:55	09:21	12:21	—
Andover	08:16	—	12:42	—
Salisbury	08:36	09:54	13:17	15:08
Yeovil	09:24	10:42	14:07	15:48
Honiton	10:01	—	14:53	16:34
Exeter	10:27	11:42	15:18	16:59



How long does it take
the 11:35 from Waterloo
to travel to:

- a) Salisbury
- b) Yeovil
- c) Exeter?

Thursday

4.3.21

TBAT solve word problems about time

Ellie takes the train to Edinburgh. She sets off at 09:25 in the morning and arrives at 09:47. How long was her journey?

4.3.21

TBAT solve word problems about time

Annabel drives to Cardiff. Her journey takes her 2 hours and 41 minutes. She arrives at 11:55. What time did she set off?

4.3.21

TBAT solve word problems about time

Alexander goes on a walk to climb Ska Fell Pike. The climb takes him 3 hours and 33 minutes. He arrives at the top of the mountain at 14:22. At what time did he start his climb?