













4.3.21





TBAT convert between analogue and digital clocks

*Task 1: Fill in the missing analogue clock hands and digital times.
Remember the hour hand is smaller than the minute hand.*

1	clock 1	clock 2	clock 3	clock 4
				
1:00		2:30		

2	clock 1	clock 2	clock 3	clock 4
				
	5:15		6:30	










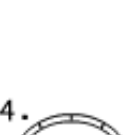


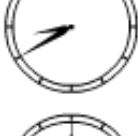
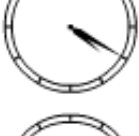
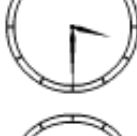
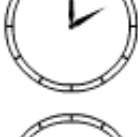
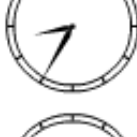


















3	clock 1	clock 2	clock 3	clock 4
				
7:00		9:00		

4	clock 1	clock 2	clock 3	clock 4
				

4.3.21

TBAT convert between analogue and digital clocks

Task 2: Match the analogue time to the correct digital time.

1.		<div>8:50</div>	2.		<div>7:40</div>	3.		<div>2:25</div>
		<div>6:15</div>			<div>2:55</div>			<div>6:05</div>
		<div>9:20</div>			<div>12:10</div>			<div>12:40</div>
		<div>4:40</div>			<div>3:35</div>			<div>12:45</div>
		<div>9:30</div>			<div>7:30</div>			<div>4:35</div>
		<div>9:50</div>						<div>6:15</div>
4.		<div>7:40</div>	5.		<div>1:35</div>	6.		<div>8:35</div>
		<div>11:25</div>			<div>2:35</div>			<div>10:55</div>
		<div>2:00</div>			<div>4:25</div>			<div>8:20</div>
		<div>8:50</div>			<div>4:20</div>			<div>2:25</div>
		<div>1:40</div>			<div>3:35</div>			<div>3:30</div>
		<div>8:40</div>			<div>4:05</div>			<div>7:20</div>