

White

**Rose
Maths**

Spring - Block 2

Money

Overview

Small Steps

Notes for 2020/21

Count money (pence)	R
Count money (pounds)	R
Pounds and pence	
Convert pounds and pence	
Add money	
Subtract money	
Give change	

Counting money in pounds and pence is revisited here before children start looking at them side by side.

At this stage children should not learn about money using decimals, although they may have come across this in real life. Instead they learn about money in terms of a number of pounds and a number of pence.

Count Money - Pence

Notes and Guidance

This block introduces the £ and p symbols for the first time.

Children will count in 1 p, 2 p, 5 p and 10 p coins. Children can also use related facts to count in 20 p coins.

Children do not convert between pounds and pence, therefore children will need to recognise the 50 p coin but they will not count up in 50 p coins.

Mathematical Talk

What is different about the coins you have counted?

Is the group with the most coins always the biggest amount?
Why?

What do you notice about the totals?

Are silver coins always worth more than copper coins?

What different ways can you count the coins?

Which is the quickest way?

Varied Fluency

R

Count the money.

 = ____ p







 = ____ p

 = ____ p

____ p = 

____ p = 

Use <, > or = to compare the money.

	○	
	○	
	○	

Count the money.

 = ____ p

 = ____ p

Count Money - Pence

Reasoning and Problem Solving

R

Jack selects four of these coins.



He can use the coins more than once.

What total could he make?

What is the lowest total?

What is the greatest total?

Example answers:

20 p, 10 p, 10 p
and 1 p makes 41 p.

5 p, 5 p, 5 p and
5 p makes 20 p.

1 p, 20 p, 5 p and
2 p makes 28 p.

The lowest total
would be 1 p, 1 p,
1 p and 1 p, makes
4 p.

The greatest total
would be 20 p,
20 p, 20 p and
20 p makes 80 p.

Draw coins to make the statements
correct.



For the first one,
any answer
showing less than
30 p on the right
is correct. E.g. two
10 p coins.

For the second
one, any answer
showing less than
25 p on the left.
E.g. three 2 p
coins.

Count Money - Pounds

Notes and Guidance

Children will continue counting but this time it will be in pounds, not pence. The £ symbol will be introduced. Children must be aware that both coins and notes are used to represent amounts in pounds. Children will count in £1, £2, £5, £10 and £20s. In this year group, children work within 100, therefore they will not count in £50s.

Mathematical Talk

Do the notes have a greater value than the coins?

Which is the hardest to count? Which is the easiest? Why?

What do you notice about the amounts?

Does it matter which side the equals sign is?

Can you find the total in a different way?

Varied Fluency

R

Count the money.



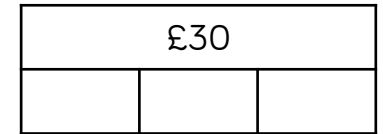
£ ____ =



£ ____ =



Complete the bar models.



Match the money to the correct total.



£25

£60

£10


Which is the odd one out? Explain why.

Count Money - Pounds

Reasoning and Problem Solving

R

Ron thinks he has £13



Is he correct?
Explain your answer.

No, because three
£2 coins make £6

£10 and £6 is
equal to £16

He has mistaken
his £2 coins for £1
coins.

Explain the mistake.

£2, £4, £6, £7, £8, £10

£7 is the mistake.
It is an odd
number. The 2
times table are all
even.

When counting in
£2s, we would say
£2, £4, £6, £8,
£10

Pounds and Pence

Notes and Guidance

Children need to know the value of each coin and note and understand what these values represent.

They should understand that money can be represented in different ways but still have the same value.

Children will need to be able to add coin values together to find the total amount.

Mathematical Talk

What is the value of the coin/note?

What does p mean?

Why do we have different values of coins and notes?

What's the difference between £5 and 5p?

Varied Fluency

Match the amounts that are equal.

Fifteen pounds



Fifteen pence



Fifty pounds



Fifty pence





How much money does the jar contain?

The jar contains £____ and ____ p.



Use $<$, $>$ or $=$ to make the statements correct.



Pounds and Pence

Reasoning and Problem Solving

Rosie has 5 silver coins in her purse.

She can make 40p with three coins.

She can also make 75p with three coins.

How much money does Rosie have in her purse?

Rosie has 95 pence in her purse. She has one 20p coin, one 50p coin, two 10p coins and one 5p coin.

Amir has 5 different coins in his wallet.



What is the greatest amount of money he could have in his wallet?
What is the least amount of money?

Greatest:
£3 and 80p

Least:
38p

Convert Pounds and Pence

Notes and Guidance

Children convert between pounds and pence using the knowledge that £1 is 100 pence.
They group 100 pennies into pounds when counting money.
They apply their place value knowledge and use their number bonds to 100

Mathematical Talk

How many pennies are there in £1?

How can this fact help us to convert between pounds and pence?

How could you convert 600p into pounds?
How could you convert 620p into pounds?

Varied Fluency

What is the total of the coins shown?



Can you group any of the coins to make 100 pence?

How many whole pounds do you have?

How many pence are left over?

So there is £___ and ___ p.

Write the amounts in pounds and pence.



Write each amount in pounds and pence.

165p 234p 199p 112p 516p

Convert Pounds and Pence

Reasoning and Problem Solving

Dexter has 202 pence.

He has **one** pound coin.

Show five possible combinations of other coins he may have.

Whitney thinks that she has £10 and 3p.
Is she correct?



Explain your answer.

Children may work systematically and look at combinations of coins that make £1 to help them.

Whitney is wrong, she has £12 and 1p. Whitney has not considered the value of the coins she has.

Dora thinks there is more than £5 but less than £6
Is Dora correct?



Convince me.

Dora is incorrect.
There is £6 and 30p.

This is greater than £6

Add Money

Notes and Guidance

Children add two amounts of money using pictorial representations to support them.

They are encouraged to add the pounds first and then add the pence. Children then exchange the pence for pounds to complete their calculations.

Mathematical Talk

Can you group any of the coins to make a pound?

Can you use estimation to support your calculation?

Why is adding 99p the same as adding £1 and taking away 1p?

Varied Fluency

Mo uses a part-whole model to add money.

£___ and ___ p + £___ and ___ p

There is £___ and 105p.

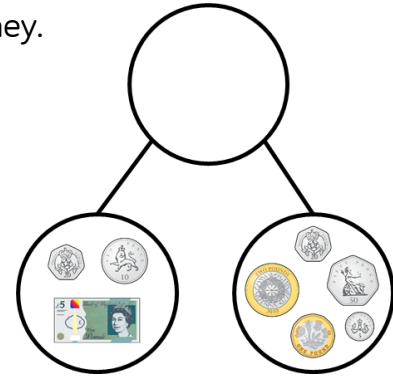
105p = £___ and ___p

Altogether there is £___ and ___p.

Use Mo's method to find the total of:

£10 and 35p and £4 and 25p

£10 and 65p and £9 and 45p



What calculation does the bar model show?
Find the total amount of money.



A book costs £5 and 99p.
A magazine costs £1 and 75p.
How much do the book and magazine cost altogether?

Add Money

Reasoning and Problem Solving

Dora bought these muffins.



Muffins cost 35p each.
How much did Dora spend?

Tommy bought three times as many muffins as Dora.
How many muffins did Tommy buy?
How much money did Tommy spend on muffins?

How much more money did Tommy spend than Dora?

Dora spent 105p
or £1 and 5p.

Tommy bought 9
muffins.
He spent 315p or
£3 and 15p.

Tommy spent
210p or £2 and
10p more than
Dora.

Rosie has £5
Has she got enough money to buy a car
and two apples?



£3 and 35p

£2 and 55p



85p

75p

What combinations of items could Rosie buy with £5?

£3 and 35p +
85p + 85p = £5
and 5p

She does not have
enough money.

Rosie could buy

1 car and 2
balloons
1 car, 1 apple and 1
balloon
1 magazine and 2
apples

Subtract Money

Reasoning and Problem Solving

Jack has £2 and 90p.
Teddy has three times as much money as Jack.

How much more money does Teddy have than Jack?

Rosie has twice as much money as Teddy.

How much more money does Rosie have than Jack?

Jack: £2 & 90p
Teddy: £8 & 70p
Rosie: £17 & 40p

Teddy has £5 and 80p more than Jack.

Rosie has £14 and 50p more than Jack.

Use coins to support children in calculating.

Three children are calculating £4 and 20p subtract £1 and 50p.

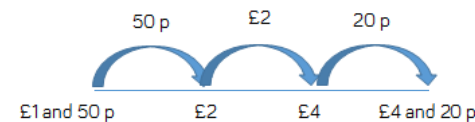
$$\begin{aligned} \text{£}4 - \text{£}1 &= \text{£}2 \\ 20\text{p} - 50\text{p} &= 30\text{p} \\ \text{£}1 + 30\text{p} &= \text{£}1 \text{ and } 30\text{p} \end{aligned}$$



Annie



Teddy



The difference is £2 and 70p.

$$\begin{aligned} \text{£}4 \text{ and } 20\text{p} - \text{£}2 &= \text{£}2 \text{ and } 20\text{p} \\ \text{£}2 \text{ and } 20\text{p} + 50\text{p} &= \text{£}2 \text{ and } 70\text{p} \end{aligned}$$



Eva

Who is correct? Who is incorrect?
Which method do you prefer?

Annie's second step of calculation is incorrect. Teddy and Eva both got the correct answer using different methods. Children may choose which method they prefer or discuss pros and cons of each.

Give Change

Notes and Guidance

Children use a number line and a part-whole model to subtract to find change.

Teachers use coins to practically model giving change.

Encourage role-play to give children a context of giving and receiving change.

Mathematical Talk

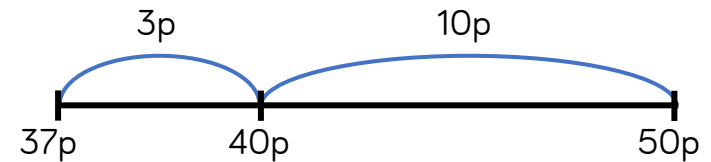
What do we mean by ‘change’ in the context of money?

Which method do you find most effective?

How does the part-whole model help to solve the problem?

Varied Fluency

- Mo buys a chocolate bar for 37p. He pays with a 50p coin. How much change will he receive?

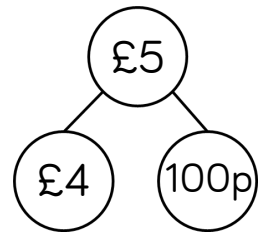


Mo will receive ____ p change.

Use a number line to solve the problems.

- Ron has £1. He buys a lollipop for 55p. How much change will he receive?
- Whitney has £5. She spends £3 and 60p. How much change will she receive?

- Tommy buys a comic for £3 and 25p. He pays with a £5 note. How much change will he receive? Use the part-whole model to help you.



Use a part-whole model to solve the problem.

- Eva buys a train for £6 and 55p. She pays with a £10 note. How much change will she receive?

Give Change

Reasoning and Problem Solving

Dora spends £7 and 76p on a birthday cake.



She pays with a £10 note.
How much change does she get?

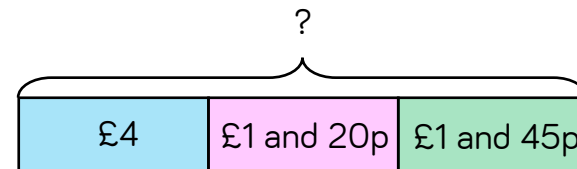
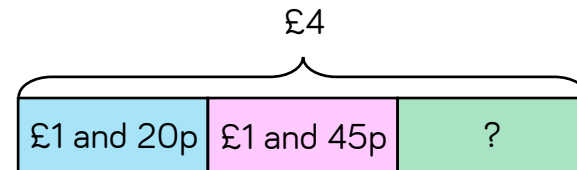
The shopkeeper gives her six coins for her change.
What coins could they be?

She receives £2 and 24p change.

There are various answers for which coins it could be, e.g. £1, £1, 10p, 10p, 2p, 2p.

Amir has £4
He buys a pencil for £1 and 20p and a book for £1 and 45p.

Which bar model represents the question?
Explain how you know.



Use the correct bar model to help you calculate how much change Amir receives.

The first bar model is correct as the whole is £4 and we are calculating a part as Amir has spent money.
Amir receives £1 and 35p change.