





1) What is the total value of the coins? Find groups of £1 (or 100p) to help you.



- a) There are \_\_\_\_\_ whole pounds.  
There are \_\_\_\_\_ pence left over.  
So the total value is \_\_\_\_\_ and \_\_\_\_\_ p.



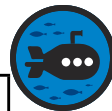
- b) There are \_\_\_\_\_ whole pounds.  
There are \_\_\_\_\_ pence left over.  
So the total value \_\_\_\_\_ and \_\_\_\_\_ p.



- c) There are \_\_\_\_\_ whole pounds.  
There are \_\_\_\_\_ pence left over.  
So the total value \_\_\_\_\_ and \_\_\_\_\_ p.

2) Write each amount in pounds and pence.

- a) 500 pence \_\_\_\_\_  
b) 692 pence \_\_\_\_\_  
c) 458 pence \_\_\_\_\_  
d) 309 pence \_\_\_\_\_




1) Match each child to the amount they have saved.

Savings A	Savings B	Savings C


I have less than seven pounds.  
My savings are \_\_\_\_\_.



I have the exact number of pounds.  
My savings are \_\_\_\_\_.



I have more than seven pounds.  
My savings are \_\_\_\_\_.



2) Freddie and Ada have these coins.



Freddie says there must be less than £10 as there are no notes. Ada thinks there is more than £10. Who is correct?

---



---

3) Finn has four coins; each has a different value.



I cannot have more than £4.

Do you agree? Give your reasons.

---



---



---