


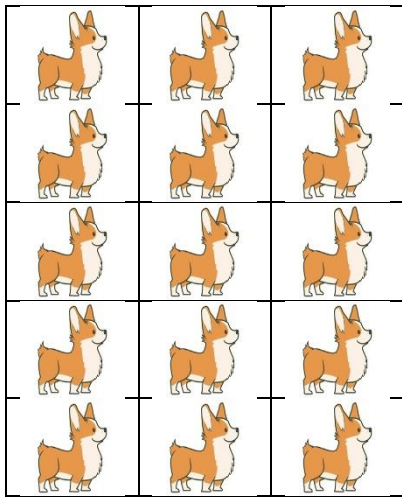
22.2.21

IBAT: Understand arrays


Match the correct multiplication sentence to the array.




$$10 \times 3 = 30$$



$$5 \times 4 = 20$$



$$3 \times 5 = 15$$



$$2 \times 5 = 10$$

NS: With 12 cubes how many arrays can you create?


Draw your arrays and write your number sentence:

Arrays	Number sentence

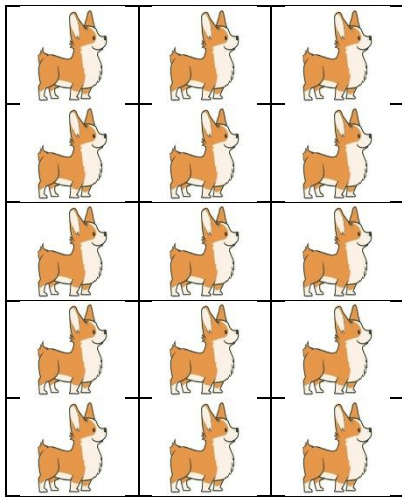
22.2.21

TBAT: Understand arrays


Write the multiplication sentence for each array.




$$_ \times _ = 10$$



$$_ \times _ = 20$$



$$_ \times _ = 30$$



$$_ \times _ = 15$$

NS: Amelia Earhart made 3 cups of hot chocolate. In each cup of hot chocolate there was 5 marshmallows. How many marshmallows were there in total?



Draw an array to help you:

Write the number sentence: