


8.01.21

TBAT: Compare amounts


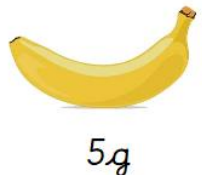

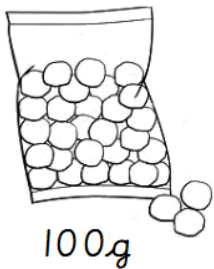
Give an example for each of the following:

- Mass
- Length
- Capacity

Can you predict what will happen to the scales?
Give your reasoning.



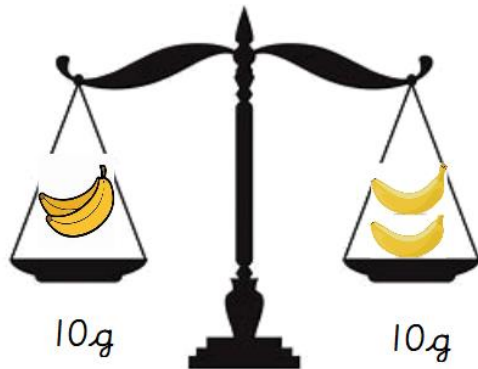
Can you predict what will happen to the scales?
Give your reasoning.




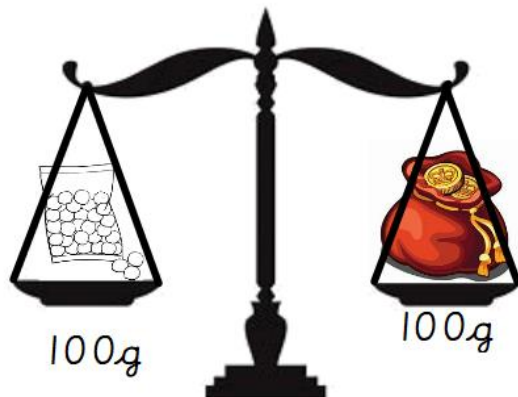
8.01.21

TBAT: Compare amounts

Create a mathematical sentence using more than and less than.



Create a mathematical sentence using more than and less than.



Create a mathematical sentence using more than and less than.

Extension:

Grace, Ryan and Harrold are eating a birthday cake.



- Grace eats 100g
- Ryan has double of what Grace eats.
- Harrold has half of what Grace eats.

Write two more than or less than sentences and explain why.

Example: Grace eats ____ than Harrold because ____